

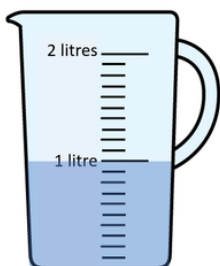
Maths - 07.05.26

Can you log on to TTRockstars and practice your timestables. Can you beat your best score?



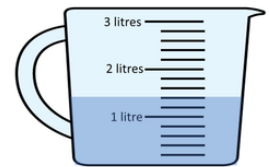
Capacity and Volume work:

What is the capacity of the jug?

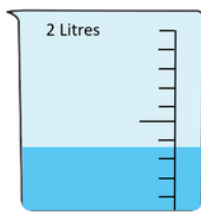


- A) 1 litre
- B) 2 litres
- C) More than 2 litres

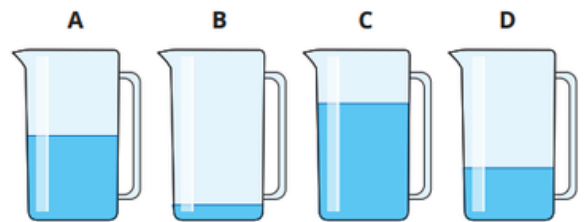
Which jug has the greatest capacity?



Which jug has the greatest capacity?
Which jug has the greatest volume of water?

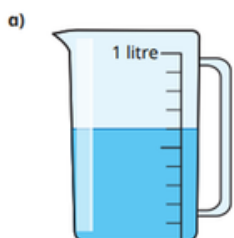


Each container has the same capacity.

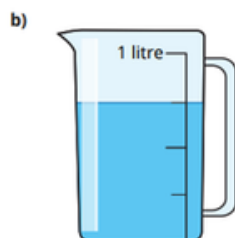


Put the containers in order of the volume of liquid they contain.
Start with the container with the greatest volume.

What is the volume of water in each jug?

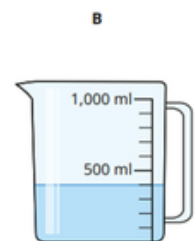
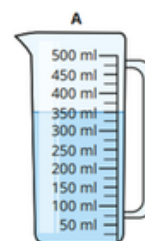


ml



ml

Which measuring container has more liquid?



Container _____ has more liquid.
Explain your answer.