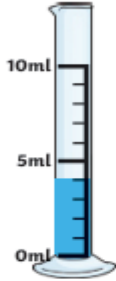


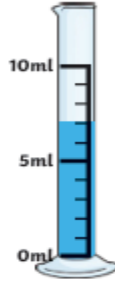
Measuring Volume - 07/05/26

Aim: I can measure volume.

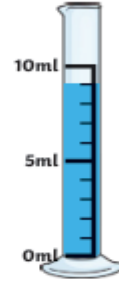
How much water is there in each jug?



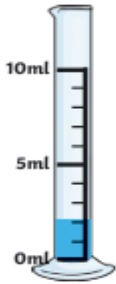
1. _____ ml



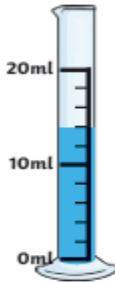
2. _____ ml



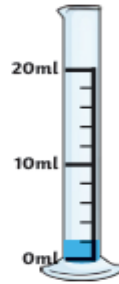
3. _____ ml




4. _____ ml



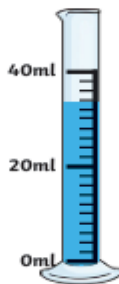
5. _____ ml



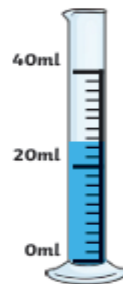
6. _____ ml



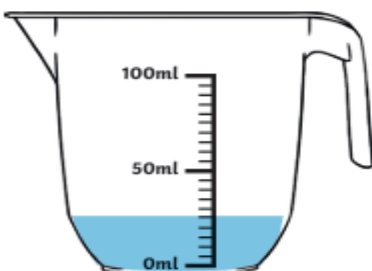
1. _____ ml



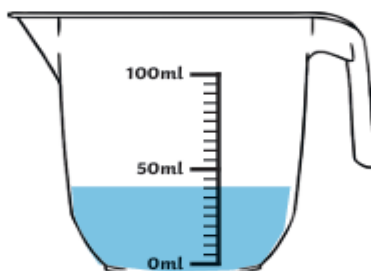
2. _____ ml



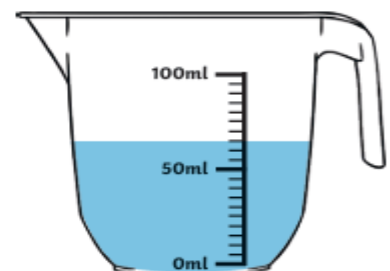
3. _____ ml



4. _____ ml



5. _____ ml



6. _____ ml